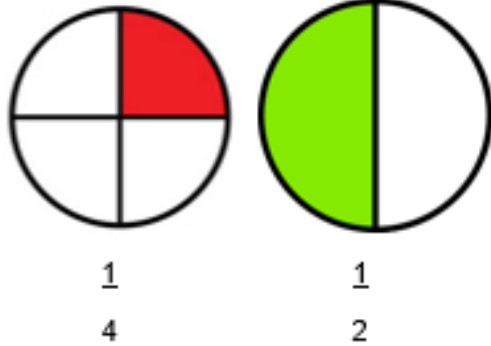


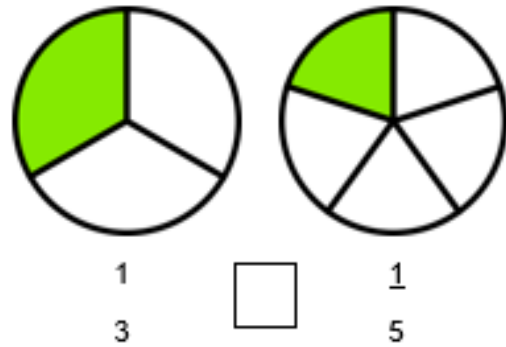


KS: I can compare and order unit fractions with different denominators.

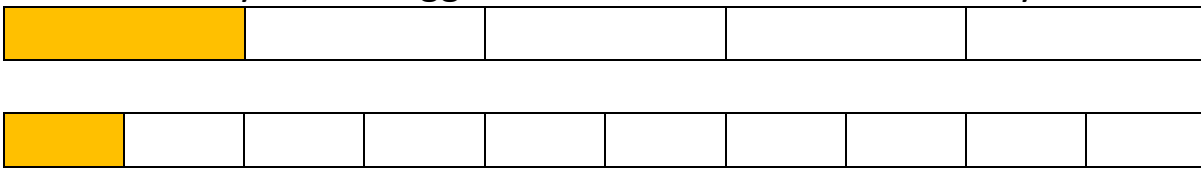
1. Circle the biggest fraction:



2. Choose $<$ $>$ $=$



3. Amanda says $\frac{1}{5}$ is bigger than $\frac{1}{10}$. Is she correct? Why?



4. Order these fractions from **biggest to smallest**:

