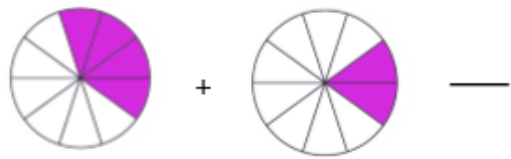
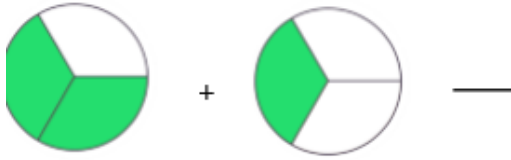


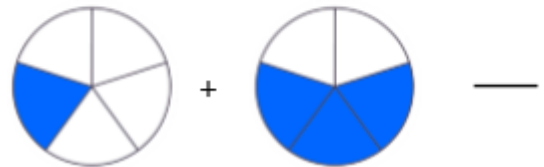



KS: I can add and subtract fractions with the same denominator

Complete these fraction sentences.



Complete these fraction sentences.



Complete this fraction sentence.

$$\frac{\quad}{4} + \frac{1}{4} = \frac{3}{4}$$

Complete this fraction sentence.

$$\frac{1}{2} + \frac{\quad}{2} = \frac{2}{2}$$

Lexi has a pizza. She splits it into fifths. She has $\frac{3}{5}$. How many pieces does she have left?



Alex and Huan are eating a cake.

Alex eats $\frac{4}{7}$ of the cake.

Huan eats $\frac{2}{7}$ of the cake.

What fraction of the cake have they eaten altogether?